

Mathestunde 5

Der Stoff aus Klasse 4

Fit fürs Gymnasium!


Schülerarbeitsheft für die 5. Klasse
als Einstieg, Wiederholung oder Selbstlerneheft

Dieses Heft gehört: _____

Bildnachweis:





















openclipart.org / fotolia.com (c): contrastwerkstatt, denis_pc, GraphicsRF

Schwere Aufgaben sind mit
diesem Symbol gekennzeichnet:



Eine besondere Addition

Kopfrechnen – Notiere das Ergebnis im Bild

 <p>1.</p> <p>$265 + 135$</p>	 <p>2.</p> <p>$832 + 268$</p>	 <p>3.</p> <p>$177 + 323$</p>	 <p>4.</p> <p>$53 + 147$</p>
 <p>5.</p> <p>$66 + 534$</p>	 <p>6.</p> <p>$92 + 708$</p>	 <p>7.</p> <p>$425 + 275$</p>	 <p>8.</p> <p>$109 + 391$</p>
 <p>9.</p> <p>$115 + 585$</p>	 <p>10.</p> <p>$331 + 269$</p>	 <p>11.</p> <p>$807 + 293$</p>	 <p>12.</p> <p>$288 + 112$</p>
 <p>13.</p> <p>$432 + 468$</p>	 <p>14.</p> <p>$320 + 280$</p>	 <p>15.</p> <p>$611 + 89$</p>	 <p>16.</p> <p>$237 + 363$</p>
 <p>17.</p> <p>$902 + 398$</p>	 <p>18.</p> <p>$729 + 271$</p>	 <p>19.</p> <p>$505 + 595$</p>	 <p>20.</p> <p>$981 + 419$</p>

Runden und auf volle Zahlen addieren

Runden

Runde auf Hunderter

	gerundet
7 635	
2 109	
9 907	
3 387	
20 278	
33 981	
55 555	
44 444	
80 991	
200 199	
523 399	
921 566	

Runde auf Tausender

	gerundet
7 635	
2 109	
9 907	
3 387	
20 278	
33 981	
55 555	
44 444	
80 991	
200 199	
523 399	
921 566	

Runde auf Zehntausender

	gerundet
7 635	
2 109	
9 907	
3 387	
20 278	
33 981	
55 555	
44 444	
80 991	
200 199	
523 399	
921 566	

Auf volle Zahl addieren

Addiere auf 10 000

3 535 +	
8 311 +	
5 909 +	
4 567 +	
9 278 +	
3 981 +	
5 555 +	
444 +	
8 991 +	
2 199 +	
3 333 +	
1 566 +	

Addiere auf 100 000





















27 600 +	
72 100 +	
99 900 +	
33 370 +	
20 270 +	
39 900 +	
55 555 +	
44 444 +	
80 991 +	
99 199 +	
53 781 +	
91 523 +	

Addiere auf 1 000 000

237 000 +	
487 000 +	
998 000 +	
700 700 +	
200 300 +	
330 900 +	
555 000 +	
444 444 +	
99 000 +	
1 001 +	
4 999 +	
20 500 +	

Addition

Kopfrechnen – Notiere das Ergebnis im Bild

 <p>1.</p> <p>$240 + 70$</p>	 <p>2.</p> <p>$380 + 90$</p>	 <p>3.</p> <p>$130 + 80$</p>	 <p>4.</p> <p>$470 + 50$</p>
 <p>5.</p> <p>$650 + 60$</p>	 <p>6.</p> <p>$720 + 30$</p>	 <p>7.</p> <p>$710 + 90$</p>	 <p>8.</p> <p>$820 + 110$</p>
 <p>9.</p> <p>$940 + 270$</p>	 <p>10.</p> <p>$990 + 80$</p>	 <p>11.</p> <p>$1200 + 700$</p>	 <p>12.</p> <p>$2600 + 800$</p>
 <p>13.</p> <p>$3900 + 500$</p>	 <p>14.</p> <p>$4200 + 680$</p>	 <p>15.</p> <p>$5600 + 730$</p>	 <p>16.</p> <p>$6300 + 990$</p>
 <p>17.</p> <p>$7400 + 770$</p>	 <p>18.</p> <p>$9100 + 460$</p>	 <p>19.</p> <p>$4800 + 750$</p>	 <p>20.</p> <p>$5200 + 340$</p>

Addition

Schriftliche Addition

Addiere die Zahlen und trage den Übertrag ein!

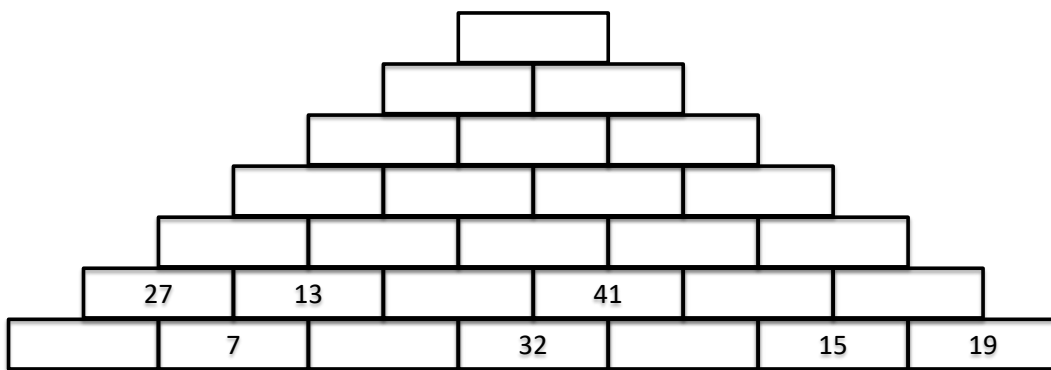
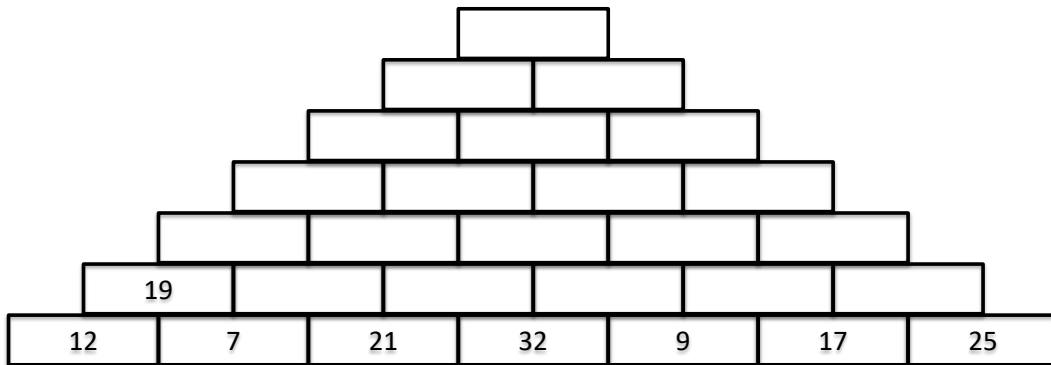
		9	3	0	5			1	5	6	1	8	9			4	7	3	3	1	2		
+	5	3	2	0	9	7	+	7	0	7	4	3	6	+		4	8	2	9	5			
<hr/>																							
<hr/>																							
		2	6	3	8	9	9			1	1	7	6	1			5	7	6	2	1	9	
		7	3	5	3	2	8			3	3	3	3	2	8			4	2	0	1	7	7
+		1	4	2	0	3		+	2	7	8	0	4	1		+	6	0	4	7	0	2	
<hr/>																							
<hr/>																							
		4	5	4	4	2				4	8	9	3			1	9	9	2	0	4		
		7	8	4	4	3			4	0	7	3	6			5	4	1	3	7	7		
		3	1	3	4	8				8	9	9	1			8	3	5	3	2	8		
+		1	0	1	8	7		+		7	2	0	2		+	3	3	1	9	0	3		
<hr/>																							
<hr/>																							

		3	2	7	1	8			2	7	2	5	3	9			5	8	2	5	2	3	
+	4	8	1	3	0	9	+	6	0	6	2	8	1	+		3	7	4	8	5			
<hr/>																							
<hr/>																							
		1	7	0	8	0	9			1	0	4	7	9	2			4	0	5	4	7	8
		6	1	5	0	2	7			4	2	1	9	0	8			2	8	0	3	0	6
+	2	0	3	2	9	3		+	2	9	3	2	0	5		+	1	2	5	7	9	3	
<hr/>																							
<hr/>																							
		5	4	2	3	3				3	5	9	9	0			2	6	9	0	3	2	
		6	9	2	4	0				4	0	6	3	6			5	0	2	5	6	4	
		4	0	0	4	8				1	9	7	9	5			6	4	5	7	2	8	
+	2	1	7	7	7			+		5	4	0	8		+	1	7	0	8	0	2		
<hr/>																							
<hr/>																							

Addition

Schriftliche Addition

Rechenpyramiden – Addiere nach oben!



Knobelaufgaben: Welche Zahlen fehlen?

a) 3, 6, 9, _____, 15, 18, 21, 24, _____, 30

b) _____, 14, 21, _____, _____, 42, 49, _____, _____, 70

c) _____, 24, 36, 48, _____, 72, _____, _____, 108, 120

Baue die größtmögliche Zahl aus den folgenden Ziffern zusammen!

1, 8, 3, 5, 9, 0

Subtraktion

Schriftliche Subtraktion

Subtrahiere die Zahlen!

Raum für eigene Aufgaben

$$\begin{array}{r} 159 \\ - 37 \\ \hline \end{array}$$

$$\begin{array}{r} 287 \\ - 26 \\ \hline \end{array}$$

$$\begin{array}{r} 628 \\ - 317 \\ \hline \end{array}$$

$$\begin{array}{r} 756 \\ - 545 \\ \hline \end{array}$$

$$\begin{array}{r} 343 \\ - 232 \\ \hline \end{array}$$

$$\begin{array}{r} 953 \\ - 642 \\ \hline \end{array}$$

$$\begin{array}{r} 779 \\ - 128 \\ \hline \end{array}$$

$$\begin{array}{r} 862 \\ - 730 \\ \hline \end{array}$$

$$\begin{array}{r} 391 \\ - 287 \\ \hline \end{array}$$

$$\begin{array}{r} 603 \\ - 257 \\ \hline \end{array}$$

$$\begin{array}{r} 516 \\ - 467 \\ \hline \end{array}$$

$$\begin{array}{r} 857 \\ - 685 \\ \hline \end{array}$$

$$\begin{array}{r} 440 \\ - 378 \\ \hline \end{array}$$

$$\begin{array}{r} 905 \\ - 456 \\ \hline \end{array}$$

$$\begin{array}{r} 771 \\ - 679 \\ \hline \end{array}$$

$$\begin{array}{r} 802 \\ - 770 \\ \hline \end{array}$$

$$\begin{array}{r} 670 \\ - 389 \\ \hline \end{array}$$

$$\begin{array}{r} 525 \\ - 348 \\ \hline \end{array}$$

$$\begin{array}{r} 637 \\ - 590 \\ \hline \end{array}$$

$$\begin{array}{r} 901 \\ - 476 \\ \hline \end{array}$$

$$\begin{array}{r} 343 \\ - 219 \\ \hline \end{array}$$

$$\begin{array}{r} 888 \\ - 696 \\ \hline \end{array}$$

$$\begin{array}{r} 575 \\ - 393 \\ \hline \end{array}$$

$$\begin{array}{r} 744 \\ - 676 \\ \hline \end{array}$$

$$\begin{array}{r} 261 \\ - 198 \\ \hline \end{array}$$

$$\begin{array}{r} 329 \\ - 318 \\ \hline \end{array}$$

$$\begin{array}{r} 603 \\ - 518 \\ \hline \end{array}$$

$$\begin{array}{r} 492 \\ - 297 \\ \hline \end{array}$$

$$\begin{array}{r} 252 \\ - 109 \\ \hline \end{array}$$





















$$\begin{array}{r} 321 \\ - 123 \\ \hline \end{array}$$

$$\begin{array}{r} 717 \\ - 171 \\ \hline \end{array}$$

$$\begin{array}{r} 444 \\ - 272 \\ \hline \end{array}$$












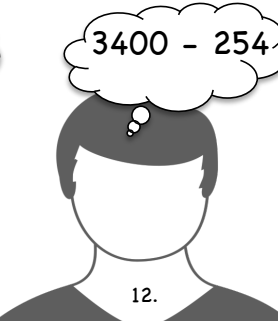








Subtraktion

Subtraktion im Kopf – Subtrahiere von Hundertern

 <p>1. $800 - 50$</p>	 <p>2. $700 - 90$</p>	 <p>3. $500 - 40$</p>	 <p>4. $400 - 70$</p>
 <p>5. $600 - 30$</p>	 <p>6. $900 - 20$</p>	 <p>7. $300 - 10$</p>	 <p>8. $200 - 60$</p>
 <p>9. $500 - 80$</p>	 <p>10. $200 - 90$</p>	 <p>11. $700 - 50$</p>	 <p>12. $400 - 30$</p>
 <p>13. $1600 - 40$</p>	 <p>14. $2900 - 70$</p>	 <p>15. $3300 - 60$</p>	 <p>16. $4800 - 20$</p>
 <p>17. $5600 - 10$</p>	 <p>18. $6100 - 30$</p>	 <p>19. $7400 - 80$</p>	 <p>20. $8500 - 90$</p>

Subtraktion

Subtraktion im Kopf – Subtrahiere von Hundertern

 <p>1.</p> <p>$700 - 89$</p>	 <p>2.</p> <p>$800 - 124$</p>	 <p>3.</p> <p>$600 - 252$</p>	 <p>4.</p> <p>$400 - 118$</p>
 <p>5.</p> <p>$300 - 277$</p>	 <p>6.</p> <p>$900 - 325$</p>	 <p>7.</p> <p>$500 - 261$</p>	 <p>8.</p> <p>$200 - 173$</p>
 <p>9.</p> <p>$1000 - 119$</p>	 <p>10.</p> <p>$1500 - 105$</p>	 <p>11.</p> <p>$2700 - 282$</p>	 <p>12.</p> <p>$3400 - 254$</p>
 <p>13.</p> <p>$4200 - 298$</p>	 <p>14.</p> <p>$5300 - 417$</p>	 <p>15.</p> <p>$7100 - 345$</p>	 <p>16.</p> <p>$8900 - 926$</p>
 <p>17.</p> <p>$9800 - 809$</p>	 <p>18.</p> <p>$9400 - 671$</p>	 <p>19.</p> <p>$6600 - 723$</p>	 <p>20.</p> <p>$5700 - 868$</p>

Subtraktion

Schriftliche Subtraktion

Subtrahiere die Zahlen!

1	2	7	6	4	9	9	5	4	3	7	8	5	3	4	4	2	1			
-		1	2	0	3	7	-	6	1	7	4	9	6	-		8	3	6	7	5
<hr/>						<hr/>						<hr/>								
8	7	6	5	4	3	7	2	2	6	6	7	5	8	2	3	9	0			
-	2	4	1	0	3	5	-	3	3	3	0	2	9	-		3	3	0	4	4
-	1	2	6	7	3	2	-	3	7	0	1	5	1	-		7	8	9	2	3
<hr/>						<hr/>						<hr/>								
9	5	4	1	8	7	2	2	9	9	9	0	3	1	9	9	2	0	4		
-		6	8	3	2	4	-	1	2	1	0	9	4	-	5	4	1	3	7	7
-		5	1	8	3	4	-		5	3	6	6	7	-	8	3	5	3	2	8
-		3	0	2	0	5	-			2	8	1	3	-	3	3	1	9	0	3
<hr/>						<hr/>						<hr/>								
<hr/>						<hr/>						<hr/>								

Finde die fehlenden Zahlen!

												8		2	4	0	1			
7	6	3	3		2	7	7		5	5		-	3	6	5	1		2		
-	4		2		8	6	-	4	2	3	0		8	-	2	5		3	7	9
<hr/>						<hr/>						<hr/>								
	5		4	1				5		2	8		4	2		3				
<hr/>						<hr/>						<hr/>								

Subtraktion von 2 Zahlen in einer Reihe – Berechne!

$$8800 - 982 = \underline{\hspace{2cm}}$$

$$2014 - 222 = \underline{\hspace{2cm}}$$

$$9350 - 2103 = \underline{\hspace{2cm}}$$

$$7098 - 78 = \underline{\hspace{2cm}}$$

$$9999 - \underline{\hspace{2cm}} = 5509$$

$$12590 - 854 = \underline{\hspace{2cm}}$$

$$\underline{\hspace{2cm}} - 431 = 960$$

$$9377 - \underline{\hspace{2cm}} = 4004$$