


# Geometrie – Formen und Körper


Benenne die geometrischen Formen und Körper!



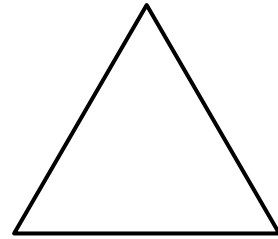
\_\_\_\_\_



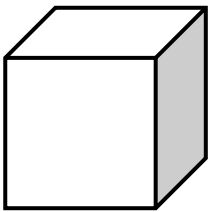
\_\_\_\_\_




\_\_\_\_\_



\_\_\_\_\_



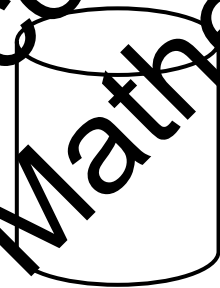
\_\_\_\_\_



\_\_\_\_\_

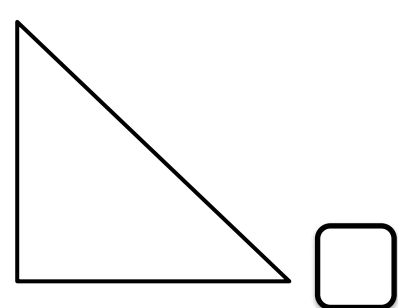
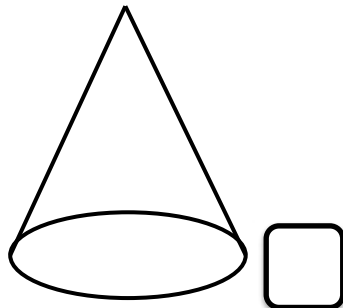
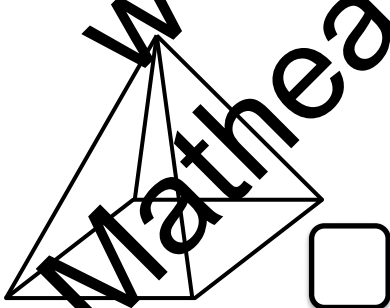
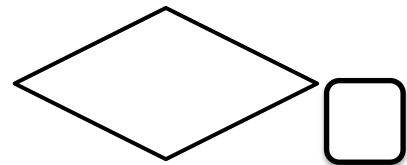


\_\_\_\_\_



\_\_\_\_\_

Erkenne die Formen und Körper und trage die richtige Nummer in das Kästchen ein!



**1** Kegel

**2** Trapez

**3** Pyramide

**4** Raute

**5** Parallelogramm

**6** Rechtwinkliges Dreieck