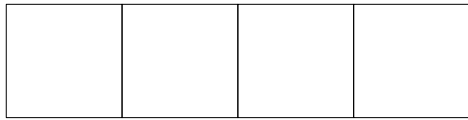



Fülle den Bruchteil aus!




$$\frac{3}{4}$$

Fülle den Bruchteil aus!



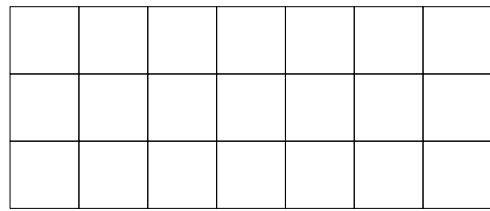
$$\frac{7}{8}$$

Fülle den Bruchteil aus!



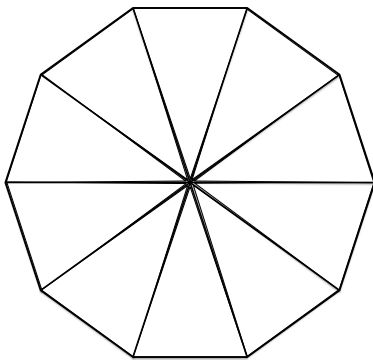
$$\frac{1}{2}$$

Fülle den Bruchteil aus!




$$\frac{7}{21}$$

Fülle den Bruchteil aus!



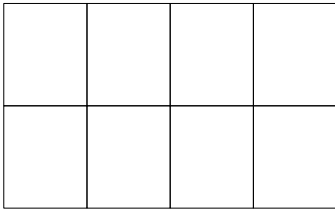
$$\frac{2}{5}$$

Fülle den Bruchteil aus!



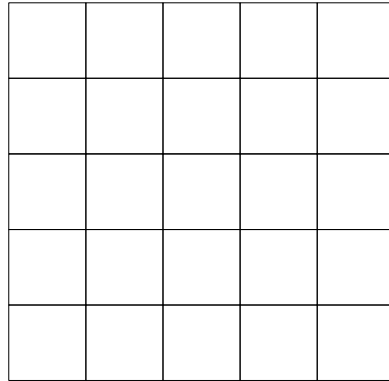
$$\frac{4}{5}$$

Fülle den Bruchteil aus!




$$\frac{1}{4}$$

Fülle den Bruchteil aus!



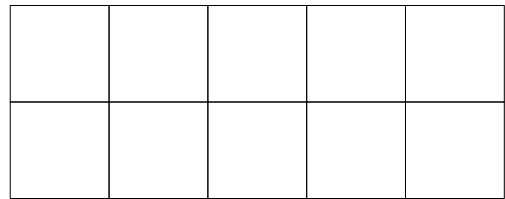
$$\frac{3}{5}$$

Fülle den Bruchteil aus!



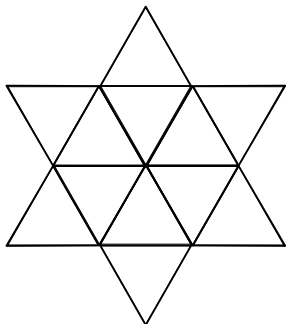
$$\frac{5}{8}$$

Fülle den Bruchteil aus!




$$\frac{1}{2}$$

Fülle den Bruchteil aus!



$$\frac{3}{4}$$

Fülle den Bruchteil aus!



$$\frac{7}{10}$$